

GATE : 2004

EE : Electrical Engineering

Duration : Three Hours

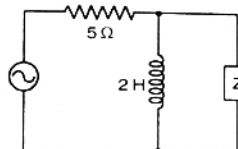
Maximum Marks : 150

Instructions :

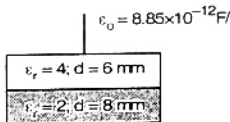
1. This questions paper contains 90 objective questions. Q. 1-30 carry 1 mark each and Q. 31-90 carry 2 marks each.
2. Answer all the questions.

Q. 1-30 Carry One Mark Each

1. The value of Z in Fig. Q 1 which is most appropriate to cause parallel resonance at 500 Hz is



- (a) 125.00 mH (b) 304.20 μF
(c) 2.0 μF (d) 0.05 μF
2. A parallel plate capacitor is shown in Fig. Q 2. It is made of two square metal plates of 400 mm side. The 14 mm space between the plates is filled with two layers of dielectrics of $\epsilon_r = 4$, 6 mm thick and $\epsilon_r = 2$, 8 mm thick. Neglecting fringing of fields at the edges the capacitance is



- (a) 1298 pF (b) 944 pF
(c) 354 pF (d) 257 pF
3. The inductance of a long solenoid of length 1000 mm wound uniformly with 3000 turns on a cylindrical paper tube of 60 mm diameter is
(a) 3.2 μH (b) 3.2 mH
(c) 32.0 mH (d) 3.2 H
 4. Total instantaneous power supplied by a 3-phase ac supply to a balanced R-L load is
(a) zero
(b) constant
(c) pulsating with zero average
(d) pulsating with non-zero average

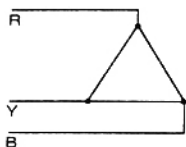
5. A 500 kVA, 3-phase transformer has iron losses of 300 W and full load copper losses of 600 W. The percentage load at which the transformer is expected to have maximum efficiency is
(a) 50.0% (b) 70.7%
(c) 141.4% (d) 200.0%

6. For a given stepper motor, the following torque has the highest numerical value.
(a) Detent torque (b) Pull-in torque
(c) Pull-out torque (d) Holding torque
7. The following motor definitely has a permanent magnet rotor
(a) DC commutator motor
(b) Brushless dc motor
(c) Stepper motor
(d) Reluctance motor

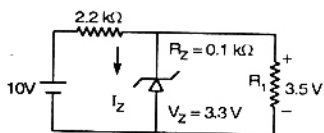
8. The type of single-phase induction motor having the highest power factor at full load is
(a) shaded pole type (b) split-phase type
(c) capacitor-start type (d) capacitor-run type
9. The direction of rotation of a 3-phase induction motor is clockwise when it is supplied with 3-phase sinusoidal voltage having phase sequence A-B-C. For counterclockwise rotation of the motor, the phase sequence of the power supply should be
(a) B-C-A (b) C-A-B
(c) A-C-B (d) B-C-A or C-A-B

10. For a linear electromagnetic circuit, the following statement is true.
(a) Field energy is equal to the co-energy
(b) Field energy is greater than the co-energy
(c) Field energy is lesser than the co-energy
(d) Co-energy is zero
11. The rated voltage of a 3-phase power system is given as
(a) rms phase voltage
(b) peak phase voltage
(c) rms line to line voltage
(d) peak line to line voltage

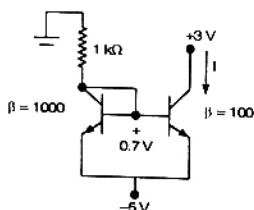
12. The phase sequence of the 3-phase system shown in Fig. Q 12 is



- (a) RYB (b) RBY
(c) BRY (d) YBR
13. In thermal power plants, the pressure in the working fluid cycle is developed by
(a) condenser (b) super heater
(c) feed water pump (d) turbine
14. For harnessing low variable waterheads, the suitable hydraulic turbine with high percentage of reaction and runner adjustable vanes is
(a) Kaplan (b) Francis
(c) Pelton (d) Impeller
15. The transmission line distance protection relay having the property of being inherently directional is
(a) impedance relay (b) MHO relay
(c) OHM relay (d) reactance relay
16. The current through the Zener diode in Fig. Q 16 is

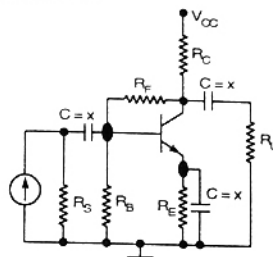


- (a) 33 mA (b) 3.3 mA
(c) 2 mA (d) 0 mA
17. Two perfectly matched silicon transistors are connected as shown in Fig. Q 17. The value of the current I is

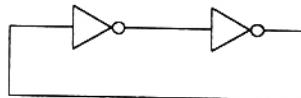


- (a) 0 mA (b) 2.3 mA
(c) 4.3 mA (d) 7.3 mA

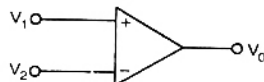
18. The feedback used in the circuit shown in Fig. Q 18 can be classified as



- (a) shunt-series feedback
(b) shunt-shunt feedback
(c) series-shunt feedback
(d) series-series feedback
19. The digital circuit using two inverters shown in Fig. Q 19 will act as



- (a) a bistable multi-vibrator
(b) an astable multi-vibrator
(c) a monostable multi-vibrator
(d) an oscillator
20. The voltage comparator shown in Fig. Q 20 can be used in the analog-to-digital conversion as



- (a) a 1-bit quantizer
(b) a 2-bit quantizer
(c) a 4-bit quantizer
(d) a 8-bit quantizer
21. The Nyquist plot of loop transfer function $G(s)H(s)$ of a closed loop control system passes through the point $(-1, j0)$ in the $G(s)H(s)$ plane. The phase margin of the system is
(a) 0° (b) 45°
(c) 90° (d) 180°
22. Consider the function, $F(s) = \frac{5}{s(s^2 + 3s + 2)}$

where $F(s)$ is the Laplace transform of the function $f(t)$. The initial value of $f(t)$ is equal to

- (a) 5 (b) $\frac{5}{2}$
(c) $\frac{5}{3}$ (d) 0

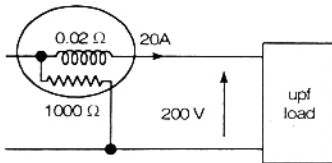
23. For a tachometer, if $\theta(t)$ is the rotor displacement in radians, $e(t)$ is the output voltage and K_t is the tachometer constant in $V/\text{rad}/\text{sec}$, then the transfer function, $\frac{E(s)}{Q(s)}$ will be

- (a) $K_t s^2$ (b) $\frac{K_t}{s}$
 (c) $K_t s$ (d) K_t

24. A dc potentiometer is designed to measure up to about 2 V with a slide wire of 800 mm. A standard cell of emf 1.18 V obtains balance at 600 mm. A test cell is seen to obtain balance at 680 mm. The emf of the test cell is

- (a) 1.00 V (b) 1.34 V
 (c) 1.50 V (d) 1.70 V

25. The circuit in Fig. Q. 25 is used to measure the power consumed by the load. The current coil and the voltage coil of the wattmeter have 0.02Ω and 1000Ω resistances respectively. The measured power compared to the load power will be



- (a) 0.4% less (b) 0.2% less
 (c) 0.2% more (d) 0.4% more

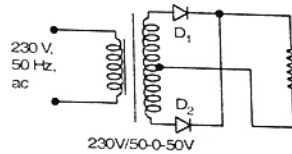
26. A galvanometer with a full scale current of 10 mA has a resistance of 1000Ω . The multiplying power (the ratio of measured current to galvanometer current) of a 100Ω shunt with this galvanometer is

(a) 110 (b) 100
 (c) 11 (d) 10

27. A bipolar junction transistor (BJT) is used as a power control switch by biasing it in the cut-off region (OFF state) or in the saturation region (ON state). In the ON state, for the BJT

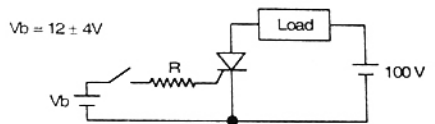
- (a) both the base-emitter and base-collector junctions are reverse biased
 (b) the base-emitter junction is reverse biased, and the base-collector junction is forward biased
 (c) the base-emitter junction is forward biased, and the base-collector junction is reverse biased
 (d) both the base-emitter and base-collector junctions are forward biased

28. The circuit in Fig. Q 28 shows a full-wave rectifier. The input voltage is 230 V (rms) single-phase ac. The peak reverse voltage across the diodes D1 and D2 is



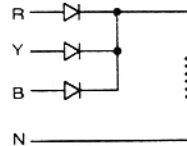
- (a) $100\sqrt{2}$ V (b) 100 V
 (c) $50\sqrt{2}$ V (d) 50 V

29. The triggering circuit of a thyristor is shown in Fig. Q 29. The thyristor requires a gate current of 10 mA, for guaranteed turn-on. The value of R required for the thyristor to turn on reliably under all conditions of V_b variation is



- (a) 10000 Ω (b) 1600 Ω
 (c) 1200 Ω (d) 800 Ω

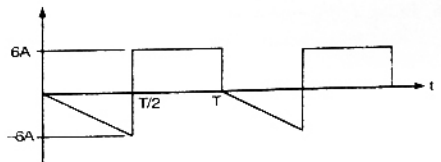
30. The circuit in Fig. Q 30 shows a 3-phase half-wave rectifier. The source is a symmetrical, 3-phase four-wire system. The line-to-line voltage of the source is 100 V. The supply frequency is 400 Hz. The ripple frequency at the output is



- (a) 400 Hz (b) 800 Hz
 (c) 1200 Hz (d) 2400 Hz

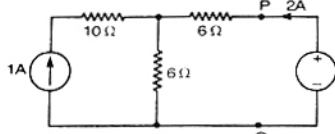
Q. 31 - 90 Carry Two Marks Each

31. The rms value of the periodic waveform given in Fig. Q. 31 is



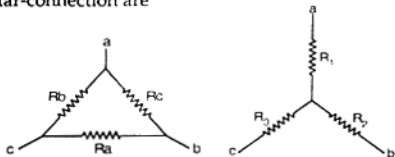
- (a) $2\sqrt{6}$ A (b) $6\sqrt{2}$ A
 (c) $\sqrt{4/3}$ A (d) 1.5 A

32. In Fig Q. 32, the value of the source voltage is



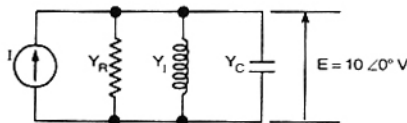
- (a) 12 V (b) 24 V
(c) 30 V (d) 44 V

33. In Fig. Q 33, R_a, R_b and R_c are $20\ \Omega, 10\ \Omega$ respectively. The resistances R_1, R_2 and R_3 in Δ of an equivalent star-connection are



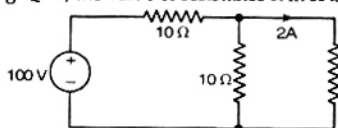
- (a) 2.5, 5, 5 (b) 5, 2.5, 5
(c) 5, 5, 2.5 (d) 2.5, 5, 2.5

34. In Fig. Q 34, the admittance values of the elements in Siemens are $Y_R = 0.5 + j0$, $Y_1 = 0 - j1.5$, $Y_C = 0 + j0.3$ respectively. The value of I as a phasor when the voltage E across the elements is $10\angle 0^\circ$ V is



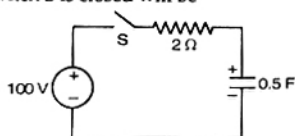
- (a) $1.5 + j0.5$ (b) $5 - j18$
(c) $0.5 + j1.8$ (d) $5 - j12$

35. In Fig. Q 35, the value of resistance R in Ω is



- (a) 10 (b) 20
(c) 30 (d) 40

36. In Fig. Q 36, the capacitor initially has a charge of 10 Coulomb. The current in the circuit one second after the switch S is closed will be



- (a) 14.7 A (b) 18.5 A
(c) 40.0 A (d) 50.0 A

37. The rms value of the resultant current in a wire which carries a dc current of 10 A and a sinusoidal alternating current of peak value 20 A is

- (a) 14.1 A (b) 17.3 A
(c) 22.4 A (d) 30.0 A

38. The Z matrix of a 2-port network as given by

$$\begin{bmatrix} 0.9 & 0.2 \\ 0.2 & 0.6 \end{bmatrix}$$

The element Y_{22} of the corresponding Y matrix of the same network is given by

- (a) 1.2 (b) 0.4
(c) -0.4 (d) 1.8

39. The synchronous speed for the seventh space harmonic mmf wave of a 3-phase, 8 pole, 50 Hz induction machine is

- (a) 107.14 rpm in forward direction
(b) 107.14 rpm in reverse direction
(c) 5250 rpm in forward direction
(d) 5250 rpm in reverse direction

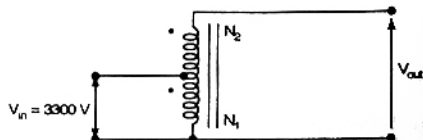
40. A rotating electrical machine having its self-inductances of both the stator and the rotor windings, independent of the rotor position will be definitely not develop

- (a) starting torque (b) synchronizing torque
(c) hysteresis torque (d) reluctance torque

41. The armature resistance of a permanent magnet dc motor is $0.8\ \Omega$. At no load, the motor draws 1.5 A from a supply voltage of 25 V and runs at 1500 rpm. The efficiency of the motor while it is operating on load at 1500 rpm drawing a current of 3.5 A from the same source will be

- (a) 48.0% (b) 57.1%
(c) 59.2% (d) 88.8%

42. A 50 kVA, 3300/230 V single-phase transformer is connected as an autotransformer shown in Fig. Q. 42. The nominal rating of the autotransformer will be



- (a) 50.0 kVA (b) 53.5 kVA
(c) 717.4 kVA (d) 767.4 kVA

43. The resistance and reactance of a 100 kVA 11000/400 V, Δ —Y distribution transformer are 0.02 and 0.07 pu respectively. The phase impedance of the transformer referred to the primary is
 (a) $(0.02 + j0.07) \Omega$ (b) $(0.55 + j1.925) \Omega$
 (c) $(15.125 + j52.94) \Omega$ (d) $(72.6 + j254.1) \Omega$
44. A single-phase, 230 V, 50 Hz, 4 pole, capacitor-start induction motor has the following stand-still impedances
 Main winding $Z_m = 6.0 + j4.0 \Omega$
 Auxiliary winding $Z_a = 8.0 + j6.0 \Omega$
 The value of the starting capacitor required to produce 90° phase difference between the currents in the main and auxiliary windings will be
 (a) 176.84 μF (b) 187.24 μF
 (c) 265.26 μF (d) 280.86 μF
45. Two 3-phase, Y-connected alternators are to be paralleled to a set of common busbars. The armature has a per phase synchronous reactance of 1.7Ω and negligible armature resistance. The line voltage of the first machine is adjusted to 3300 V and that of the second machine is adjusted to 3200 V. The machine voltages are in phase at the instant they are paralleled. Under this condition, the synchronizing current per phase will be
 (a) 16.98 A (b) 29.41 A
 (c) 33.96 A (d) 58.82 A
46. A 400 V, 15 kW, 4 pole, 50 Hz, Y-connected induction motor has full load slip of 4%. The output torque of the machine at full load is
 (a) 1.66 Nm (b) 95.50 Nm
 (c) 99.47 Nm (d) 624.73 Nm
47. For a 1.8° , 2-phase bipolar stepper motor, the stepping rate is 100 steps/second. The rotational speed of the motor in rpm is
 (a) 15 (b) 30
 (c) 60 (d) 90
48. A 8 pole, DC generator has a simplex wave-wound armature containing 32 coils of 6 turns each. Its flux per pole is 0.06 Wb. The machine is running at 250 rpm. The induced armature voltage is
 (a) 96 V (b) 192 V
 (c) 384 V (d) 768 V
49. A 400 V, 50 kVA, 0.8 pf leading Δ -connected, 50 Hz synchronous machine has a synchronous reactance of 2Ω and negligible armature resistance. The friction and windage losses are 2 kW and the core loss is 0.8 kW. The shaft is supplying 9 kW load at a power factor of 0.8 leading. The line current drawn is
 (a) 12.29 A (b) 16.24 A
 (c) 21.29 A (d) 36.88 A
50. A 500 MW 3-phase Y-connected synchronous generator has a rated voltage of 21.5 kV at 0.85 pf. The line current when operating at full load rated conditions will be
 (a) 13.43 kA (b) 15.79 kA
 (c) 23.25 kA (d) 27.36 kA
51. A 800 kV transmission line is having per phase line inductance of 1.1 mH/km and per phase line capacitance of 11.68 nF/km. Ignoring the length of the line, its ideal power transfer capability in MW is
 (a) 1204 MW (b) 1504 MW
 (c) 2085 MW (d) 2606 MW
52. A 110 kV, single core coaxial, XLPE insulated power cable delivering power at 50 Hz, has a capacitance of 125 nF/km. If the dielectric loss tangent of XLPE is 2×10^{-4} , then dielectric power loss in this cable in W/km is
 (a) 5.0 (b) 31.7
 (c) 37.8 (d) 189.0
53. A lightning stroke discharges impulse current of 10 kA (peak) on a 400 kV transmission line having surge impedance of 250Ω . The magnitude of transient over-voltage travelling waves in either direction assuming equal distribution from the point of lightning strike will be
 (a) 1250 kV (b) 1650 kV
 (c) 2500 kV (d) 2900 kV
54. The generalized circuit constants of a 3-phase, 220 kV rated voltage, medium length transmission line are

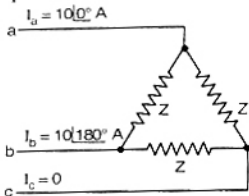
$$A = D = 0.936 + j0.016 = 0.936 \angle 0.98^\circ$$

$$B = 33.5 + j138 = 142.0 \angle 76.4^\circ \Omega$$

$$C = (-5.18 + j914) \times 10^{-6} \Omega$$
 If the load at the receiving end is 50 MW at 220 kV with a power factor of 0.9 lagging, then magnitude of line to line sending end voltage should be
 (a) 133.23 kV (b) 220.00 kV
 (c) 230.78 kV (d) 246.30 kV
55. A new generator having $E_g = 1.4 \angle 30^\circ$ pu [equivalent to $(1.212 + j0.70)$ pu] and synchronous reactance ' X_s ' of 1.0 pu on the system base, is to be connected to a bus having voltage V_1 in the existing power system. This existing power system can be represented by Thevenin's voltage $E_{th} = 0.9 \angle 0^\circ$ pu in series with Thevenin's impedance $Z_{th} = 0.25 \angle 90^\circ$ pu. The magnitude of the bus voltage V_1 of the system in pu will be
 (a) 0.990 (b) 0.973
 (c) 0.963 (d) 0.900

56. A 3-phase generator rated at 110 MVA, 11 kV is connected through circuit breakers to a transformer. The generator is having direct axis sub-transient reactance $X''_d = 19\%$, transient reactance $X'_d = 26\%$ and synchronous reactance = 130%. The generator is operating at no load and rated voltage when a three phase short circuit fault occurs between the breakers and the transformer. The magnitude of initial symmetrical rms current in the breakers will be
- (a) 4.44 kA (b) 22.20 kA
(c) 30.39 kA (d) 38.45 kA

57. A 3-phase transmission line supplies Δ -connected load Z. The conductor 'c' of the line develops an open circuit fault as shown in Fig. Q 57. The currents in the lines are as shown in the diagram. The +ve sequence current component in line 'a' will be



- (a) $5.78 \angle -30^\circ$ (b) $5.78 \angle 90^\circ$
(c) $6.33 \angle 90^\circ$ (d) $10.00 \angle -30^\circ$

58. A 500 MVA, 50 Hz, 3-phase turbo-generator produces power at 22 kV. Generator is Y-connected and its neutral is solidly grounded. Its sequence reactances are $X_1 = X_2 = 0.15$ and $X_0 = 0.05$ pu. It is operating at rated voltage and disconnected from the rest of the system (no load). The magnitude of the sub-transient line current for single line to ground fault at the generator terminal in pu will be
- (a) 2.851 (b) 3.333
(c) 6.667 (d) 8.553

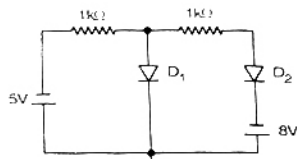
59. A 50 Hz, 4-pole, 500 MVA, 22 kV turbo-generator is delivering rated megavolt-amperes at 0.8 power factor. Suddenly a fault occurs reducing its electric power output by 40%. Neglect losses and assume constant power input to the shaft. The accelerating torque in the generator in MNm at the time of the fault will be

- (a) 1.528 (b) 1.018
(c) 0.848 (d) 0.509

60. A hydraulic turbine having rated speed of 250 rpm is connected to a synchronous generator. In order to produce power at 50 Hz, the number of poles required in the generator are

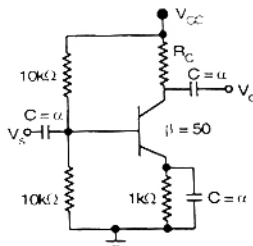
- (a) 6 (b) 12
(c) 16 (d) 24

61. Assuming that the diodes are ideal in Fig. Q. 61, the current in diode D_1 is



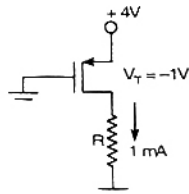
- (a) 8 mA (b) 5 mA
(c) 0 mA (d) -3 mA

62. The transconductance g_m of the transistor shown in Fig. Q 62 is 10 mS. The value of the input resistance R_{IN} is



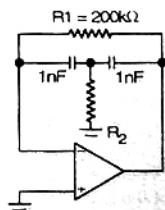
- (a) 10.0 kΩ (b) 8.3 kΩ
(c) 5.0 kΩ (d) 2.5 kΩ

63. The value of R for which the PMOS transistor in Fig. Q 63 will be biased in linear region is



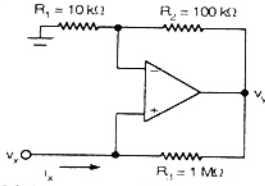
- (a) 220 Ω (b) 470 Ω
(c) 680 Ω (d) 1200 Ω

64. In the active filter circuit shown in Fig. Q 64, if $Q = 1$, a pair of poles will be realized with ω_0 equal to



- (a) 1000 rad/s (b) 100 rad/s
(c) 10 rad/s (d) 1 rad/s

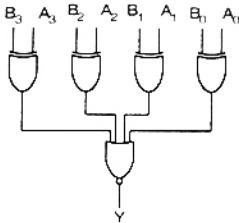
65. The input resistance $R_{in}(=v_i/i_i)$ of the circuit in Fig Q. 65 is



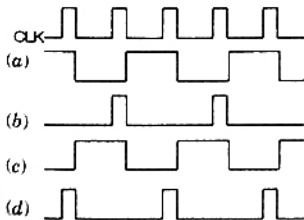
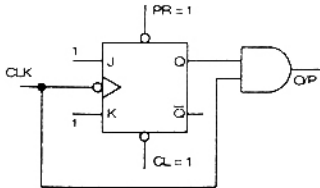
- (a) $+100 \text{ k}\Omega$ (b) $-100 \text{ k}\Omega$
 (c) $+1 \text{ M}\Omega$ (d) $-1 \text{ M}\Omega$
66. The simplified form of the Boolean expression $Y = (\bar{A} \cdot BC + D)(\bar{A} \cdot D + \bar{B} \cdot \bar{C})$ can be written as

- (a) $\bar{A} \cdot D + \bar{B} \cdot \bar{C} \cdot D$ (b) $AD + B \cdot \bar{C} \cdot D$
 (c) $(\bar{A} + D)(\bar{B} \cdot C + \bar{D})$ (d) $A \cdot \bar{D} + BC \cdot \bar{D}$

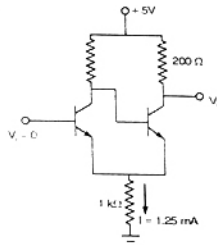
67. A digital circuit which compares two numbers $A_3 A_2 A_1 A_0$ and $B_3 B_2 B_1 B_0$ is shown in Fig. Q 67. To get output $Y = 0$, choose one pair of correct input numbers.



- (a) 1010, 1010 (b) 0101, 0101
 (c) 0010, 0010 (d) 0010, 1011
68. The digital circuit shown in Fig Q. 68 generates a modified clock pulse at the output. Choose the correct output waveform from the options given below.



69. In the Schmitt trigger circuit shown in Fig. Q 69, if $V_{CE(sat)} = 0.1 \text{ V}$, the output logic low level (V_{OL}) is

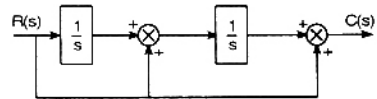


- (a) 1.25 V (b) 1.35 V
 (c) 2.50 V (d) 5.00 V
70. If the following program is executed in a microprocessor, the number of instruction cycles it will take from START to HALT is

- (a) 4 START MVI A, 14H ; Move 14H to register A
 (b) 8 SHIFT RLC ; Rotate left without carry
 (c) 13 JNZ SHIFT ; Jump on non-zero to SHIFT
 (d) 16 HALT

71. For the equation, $s^3 - 4s^2 + s + 6 = 0$ the number of roots in the left half of s -plane will be
- (a) zero (b) one
 (c) two (d) three

72. For the block diagram shown in Fig. Q. 72, the transfer function $\frac{C(s)}{R(s)}$ is equal to




- (a) $\frac{s^2 + 1}{s^2}$ (b) $\frac{s^2 + s + 1}{s^2}$
 (c) $\frac{s^2 + s + 1}{s}$ (d) $\frac{1}{s^2 + s + 1}$
73. The state variable description of a linear autonomous system is, $\dot{X} = AX$, where X is the two dimensional state vector and A is

the system matrix given by $A = \begin{bmatrix} 0 & 2 \\ 2 & 0 \end{bmatrix}$.

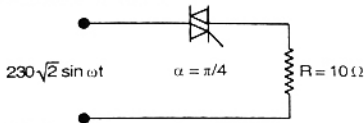
The roots of the characteristic equation are

- (a) -2 and $+2$ (b) $-j2$ and $+j2$
 (c) -2 and -2 (d) $+2$ and $+2$

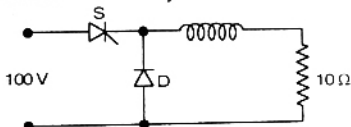
85. A MOSFET rated for 15 A, carries a periodic current as shown in Fig. Q 85. The ON state resistance of the MOSFET is 0.15Ω . The average ON state loss in the MOSFET is



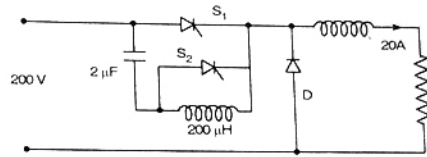
- (a) 33.8 W (b) 15.0 W
(c) 7.5 W (d) 3.8 W
86. The triac circuit shown in Fig. Q 86 controls the ac output power to the resistive load. The peak power dissipation in the load is



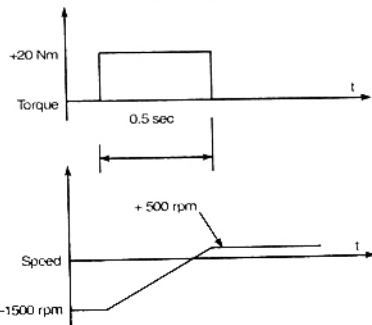
- (a) 3968 W (b) 5290 W
(c) 7935 W (d) 10580 W
87. Figure Q 87 shows a chopper operating from a 100 V dc input. The duty ratio of the main switch S is 0.8. The load is sufficiently inductive so that the load current is ripple free. The average current through the diode D under steady state is



- (a) 1.6 A (b) 6.4 A
(c) 8.0 A (d) 10.0 A
88. Figure Q 88 shows a chopper. The device S1 is the main switching device. S2 is the auxiliary commutation device. S1 is rated for 400 V, 60 A. S2 is rated for 400 V, 30 A. The load current is 20 A. The main device operates with a duty ratio of 0.5. The peak current through S1 is



- (a) 10 A (b) 30 A
(c) 30 A (d) 40 A
89. A single-phase half-controlled rectifier is driving a separately excited dc motor. The dc motor has a back emf constant of 0.5 V/rpm . The armature current is 5 A without any ripple. The armature resistance is 2Ω . The converter is working from a 230 V, single phase ac source with a firing angle of 30° . Under this operating condition, the speed of the motor will be
- (a) 339 rpm (b) 359 rpm
(c) 366 rpm (d) 386 rpm
90. A variable speed drive rated for 1500 rpm, 40 Nm is reversing under no load. Figure Q. 90 shows the reversing torque and the speed during the transient. The moment of inertia of the drive is



- (a) 0.048 kg m^2 (b) 0.064 kg m^2
(c) 0.096 kg m^2 (d) 0.128 kg m^2

ANSWERS

- | | | | | | | | | | |
|---------|---------|---------|---------|---------|---------|---------|---------|---------|---------|
| 1. (d) | 2. (d) | 3. (c) | 4. (b) | 5. (b) | 6. (c) | 7. (c) | 8. (d) | 9. (c) | 10. (a) |
| 11. (c) | 12. (b) | 13. (c) | 14. (n) | 15. (b) | 16. (c) | 17. (c) | 18. (b) | 19. (a) | 20. (b) |
| 21. (a) | 22. (d) | 23. (c) | 24. (b) | 25. (c) | 26. (c) | 27. (d) | 28. (a) | 29. (b) | 30. (c) |
| 31. (a) | 32. (c) | 33. (a) | 34. (d) | 35. (d) | 36. (a) | 37. (b) | 38. (d) | 39. (a) | 40. (b) |
| 41. (a) | 42. (d) | 43. (d) | 44. (a) | 45. (a) | 46. (c) | 47. (b) | 48. (c) | 49. (c) | 50. (b) |
| 51. (c) | 52. (d) | 53. (a) | 54. (c) | 55. (b) | 56. (c) | 57. (a) | 58. (a) | 59. (a) | 60. (d) |
| 61. (c) | 62. (c) | 63. (d) | 64. (a) | 65. (*) | 66. (a) | 67. (c) | 68. (b) | 69. (b) | 70. (c) |
| 71. (c) | 72. (b) | 73. (a) | 74. (d) | 75. (d) | 76. (b) | 77. (c) | 78. (a) | 79. (n) | 80. (c) |
| 81. (b) | 82. (b) | 83. (n) | 84. (b) | 85. (c) | 86. (d) | 87. (c) | 88. (b) | 89. (c) | 90. (c) |